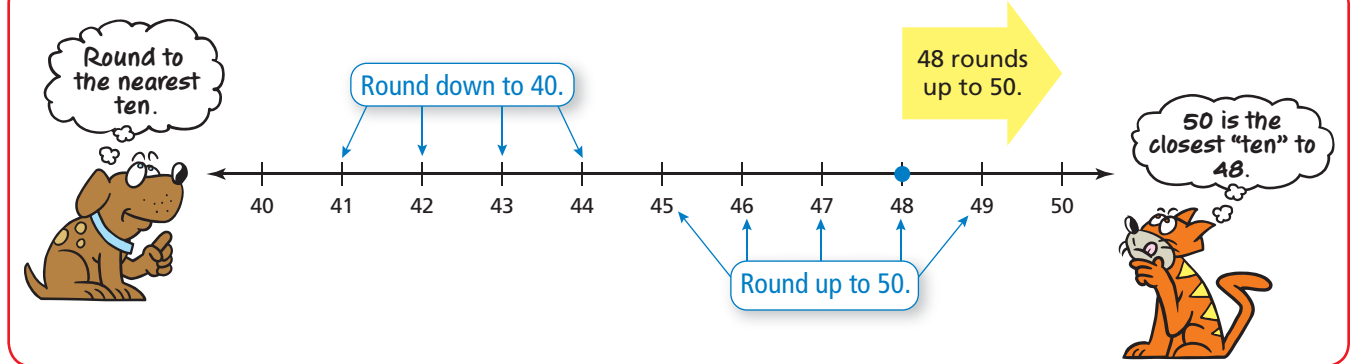


# Rounding Numbers

Name \_\_\_\_\_

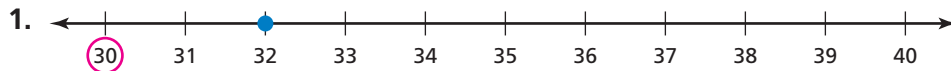
## Key Concept and Vocabulary



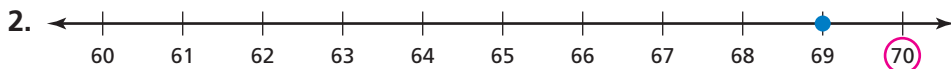
## PRACTICE MAKES *PURR-FECT*™

Check your answers at [BigIdeasMath.com](http://BigIdeasMath.com).

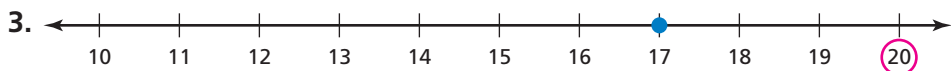
Circle the closest "ten." Then write the answer in    .



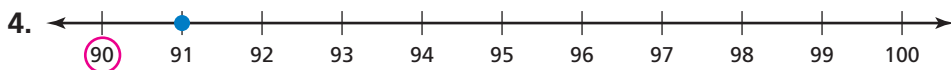
32 rounds to 30.



69 rounds to 70.



17 rounds to 20.



91 rounds to 90.

Count the money. Circle the better statement.



The total is about 40¢.

The total is about 30¢.



The total is about 40¢.

The total is about 30¢.

7. **BIOLOGY** You are counting trout in a stream. To the *nearest ten*, about 20 trout about how many are there?

