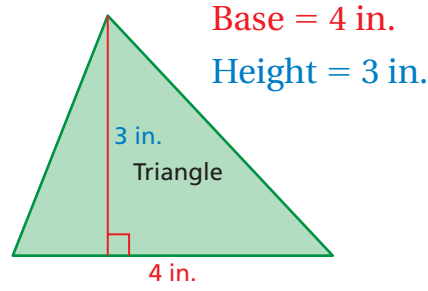
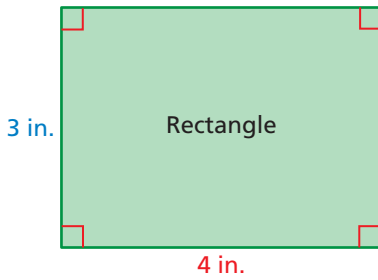


Rectangles and Triangles

Name _____

Key Concept and Vocabulary

Rectangle:
4 sides



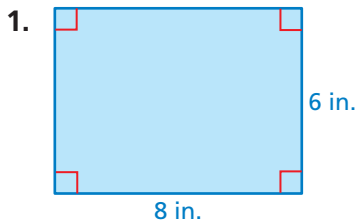
Triangle:
3 sides



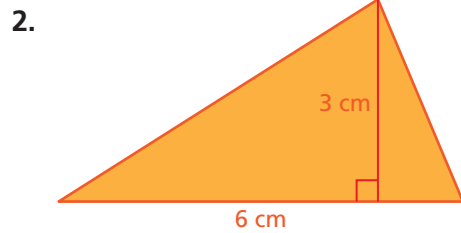
PRACTICE MAKES PURR-FECT™

Check your answers at BigIdeasMath.com.

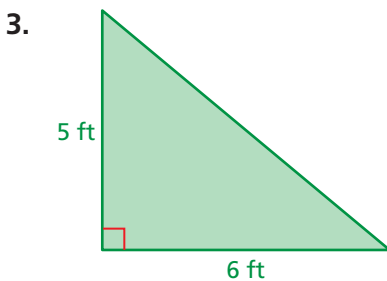
Write the base and height of the figure.



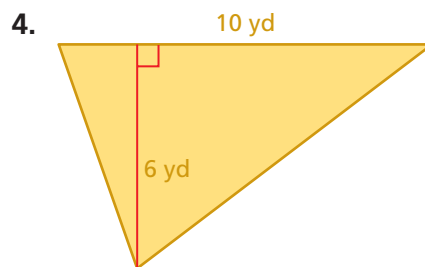
Base = 8 in. Height = 6 in.



Base = 6 cm Height = 3 cm

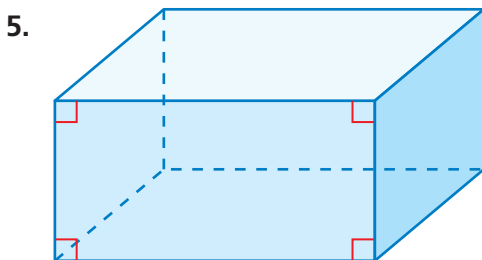


Base = 6 ft Height = 5 ft

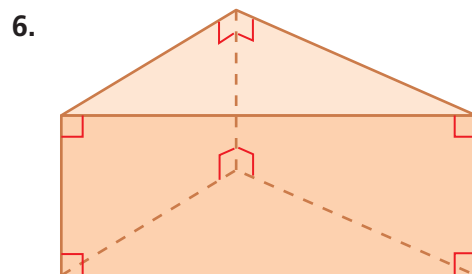


Base = 10 yd Height = 6 yd

How many of the prism's faces are rectangles? How many faces are triangles?



6 Rectangles 0 Triangles



3 Rectangles 2 Triangles