

1.1 Integers and Absolute Value

Essential Question How are velocity and speed related?

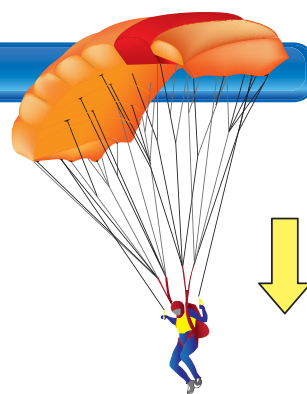
On these two pages, you will investigate vertical motion (up or down).

- Speed tells how fast an object is moving, but does not tell the direction.
- Velocity tells how fast an object is moving and also tells the direction.
 - If velocity is positive, the object is moving up.
 - If velocity is negative, the object is moving down.

1 EXAMPLE: Falling Parachute

You are gliding to the ground wearing a parachute. The table shows your height at different times.

Time (seconds)	0	1	2	3
Height (feet)	45	30	15	0



- How many feet do you move each second?
 - What is your speed? Give the units.
 - Is your velocity positive or negative?
 - What is your velocity? Give the units.
- For each 1 second of time, your height is 15 feet less.
 - You are moving at 15 feet per second.
 - Because you are moving down, your velocity is negative.
 - Your velocity is -15 feet per second. This can be written as -15 ft/sec.

2 ACTIVITY: Rising Balloons

Work with a partner. The table shows the height of a group of balloons.

Time (seconds)	0	1	2	3
Height (feet)	0	4	8	12




- How many feet do the balloons move each second?
- What is the speed of the balloons? Give the units.
- Is the velocity positive or negative?
- What is the velocity? Give the units.

3 ACTIVITY: Finding Speed and Velocity

Work with a partner. The table shows the height of a firework's parachute.

Time (seconds)	Height (feet)
0	480
1	360
2	240
3	120
4	0



- How many feet does the parachute move each second?
- What is the speed of the parachute? Give the units.
- Is the velocity positive or negative?
- What is the velocity? Give the units.

Inductive Reasoning

- Copy and complete the table.

Velocity (feet per second)	-14	20	-2	0	25	-15
Speed (feet per second)						

- Find two different velocities for which the speed is 16 feet per second.
- Which number is greater: -4 or 3 ? Use a number line to explain your reasoning.
- One object has a velocity of -4 feet per second. Another object has a velocity of 3 feet per second. Which object has the greater speed? Explain your answer.

What Is Your Answer?

In this lesson, you will study **absolute value**. Here are some examples:

$$\text{Absolute value of } -16 = 16$$

$$\text{Absolute value of } 16 = 16$$

$$\text{Absolute value of } 0 = 0$$

$$\text{Absolute value of } -2 = 2$$

- IN YOUR OWN WORDS** How are velocity and speed related?
- Which of the following is a true statement? Explain your reasoning.
 - Absolute value of velocity = speed
 - Absolute value of speed = velocity

Practice

Use what you learned about absolute value to complete Exercises 4–11 on page 6.

The following numbers are **integers**.

..., -3, -2, -1, 0, 1, 2, 3, ...

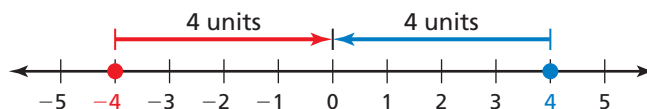
Key Vocabulary

integer, p. 4
absolute value, p. 4

Key Idea

Absolute Value

Words The **absolute value** of an integer is the distance between the number and 0 on a number line. The absolute value of a number a is written as $|a|$.



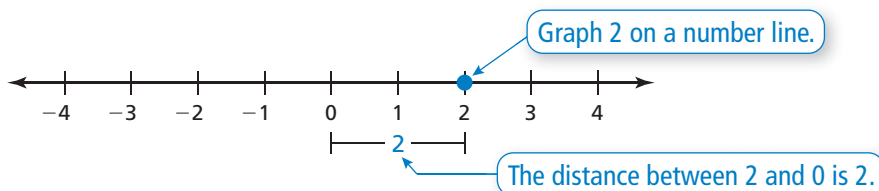
Numbers

$$|-4| = 4$$

$$|4| = 4$$

EXAMPLE 1 Finding Absolute Value

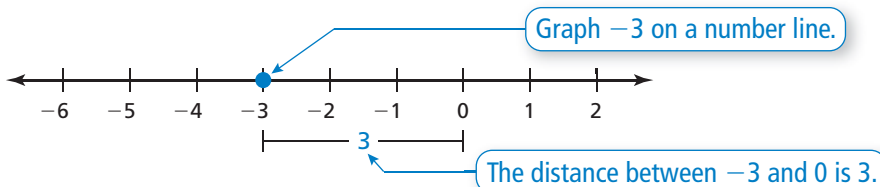
Find the absolute value of 2.



So, $|2| = 2$.

EXAMPLE 2 Finding Absolute Value

Find the absolute value of -3.



So, $|-3| = 3$.

On Your Own

Find the absolute value of the integer.

1. 7

2. -1

3. -5

4. 14

Now You're Ready
Exercises 4-19

EXAMPLE 3 Comparing Values

Remember

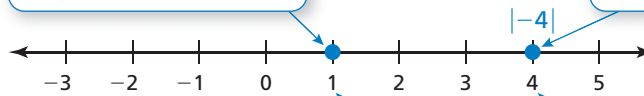
A number line can be used to compare and order integers. Numbers to the left are less than numbers to the right. Numbers to the right are greater than numbers to the left.



Compare 1 and $|-4|$.

Graph 1 on a number line.

Graph $|-4| = 4$ on a number line.



1 is to the left of $|-4|$.

∴ So, $1 < |-4|$.

On Your Own

Copy and complete the statement using $<$, $>$, or $=$.

5. $|-2|$ -1

6. -7 $|6|$

7. $|10|$ 11

8. 9 $|-9|$

Now You're Ready
Exercises 20–25

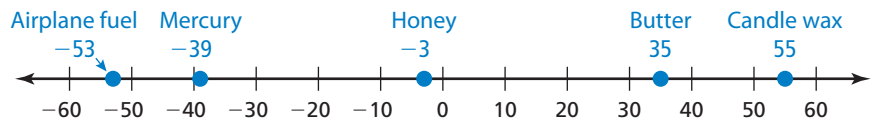
EXAMPLE 4 Real-Life Application

Substance	Freezing Point ($^{\circ}\text{C}$)
Butter	35
Airplane fuel	-53
Honey	-3
Mercury	-39
Candle wax	55

The *freezing point* is the temperature at which a liquid becomes a solid.

- Which substance in the table has the lowest freezing point?
- Is the freezing point of mercury or butter closer to the freezing point of water, 0°C ?

- a. Graph each freezing point.



∴ Airplane fuel has the lowest freezing point, -53°C .

- b. The freezing point of water is 0°C , so you can use absolute values.

Mercury: $|-39| = 39$

Butter: $|35| = 35$

∴ Because 35 is less than 39, the freezing point of butter is closer to the freezing point of water.

On Your Own

9. Is the freezing point of airplane fuel or candle wax closer to the freezing point of water? Explain your reasoning.

1.1 Exercises

Vocabulary and Concept Check

1. **VOCABULARY** Which of the following numbers are integers?

$$9, 3.2, -1, \frac{1}{2}, -0.25, 15$$

2. **VOCABULARY** What is the absolute value of an integer?


3. **WHICH ONE DOESN'T BELONG?** Which expression does *not* belong with the other three? Explain your reasoning.

$|6|$

6

-6

$|-6|$



Practice and Problem Solving

Find the absolute value of the integer.

- | | | | | | |
|---|---|---------|---------|--------|----------|
| 1 | 2 | 4. 9 | 5. -6 | 6. -10 | 7. 10 |
| | | 8. -15 | 9. 13 | 10. -7 | 11. -12 |
| | | 12. 5 | 13. -8 | 14. 0 | 15. 18 |
| | | 16. -24 | 17. -45 | 18. 60 | 19. -125 |

Copy and complete the statement using $<$, $>$, or $=$.

- | | | | |
|---|--------------------------------------|--|---------------------------------------|
| 3 | 20. 2 <input type="text"/> $ -5 $ | 21. $ -4 $ <input type="text"/> 7 | 22. -5 <input type="text"/> $ -9 $ |
| | 23. $ -4 $ <input type="text"/> -6 | 24. $ -1 $ <input type="text"/> $ -8 $ | 25. $ 5 $ <input type="text"/> $ -5 $ |

ERROR ANALYSIS Describe and correct the error.

26.  $|10| = -10$

27.  $|-5| < 4$

28. **SAVINGS** You deposit \$50 in your savings account. One week later, you withdraw \$20. Write each amount as an integer.

29. **ELEVATOR** You go down 8 floors in an elevator. Your friend goes up 5 floors in an elevator. Write each amount as an integer.

Order the values from least to greatest.

- | | |
|--|--|
| 30. 8, $ 3 $, -5 , $ -2 $, -2 | 31. $ -6 $, -7 , 8, $ 5 $, -6 |
| 32. -12 , $ -26 $, -15 , $ -12 $, $ 10 $ | 33. $ -34 $, 21, -17 , $ 20 $, $ -11 $ |

Simplify the expression.

- | | | |
|-------------|------------|--------------|
| 34. $ -30 $ | 35. $- 4 $ | 36. $- -15 $ |
|-------------|------------|--------------|

37. **PUZZLE** Use a number line.

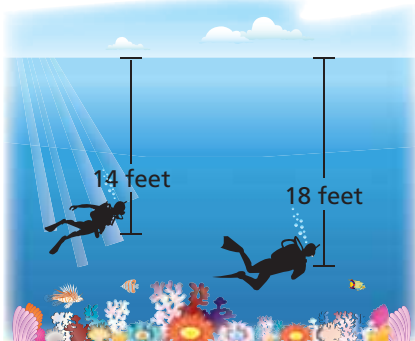
- Graph and label the following points on a number line: $A = -3$, $E = 2$, $M = -6$, $T = 0$. What word do the letters spell?
- Graph and label the absolute value of each point in part (a). What word do the letters spell now?

38. **OPEN-ENDED** Write a negative integer whose absolute value is greater than 3.

REASONING Determine whether $n \geq 0$ or $n \leq 0$.

39. $n + |-n| = 2n$

40. $n + |-n| = 0$



41. **CORAL REEF** Two scuba divers are exploring a living coral reef.

- Write an integer for the position of each diver relative to sea level.
- Which integer in part (a) is greater?
- Which integer in part (a) has the greater absolute value? Compare this with the position of the diver farther from sea level.

42. **VOLCANOES** The *summit elevation* of a volcano is the elevation of the top of the volcano relative to sea level. The summit elevation of the volcano Kilauea in Hawaii is 1277 meters. The summit elevation of the underwater volcano Loihi in the Pacific Ocean is -969 meters. Which summit is closer to sea level?

43. **MINIATURE GOLF** The table shows golf scores, relative to *par*.

- The player with the lowest score wins. Which player wins?
- Which player is at par?
- Which player is farthest from par?

Player	Score
1	+5
2	0
3	-4
4	-1
5	+2

True or False? Determine whether the statement is *true* or *false*. Explain your reasoning.

44. If $x < 0$, then $|x| = -x$.

45. The absolute value of every integer is positive.



Fair Game Review what you learned in previous grades & lessons

Add. (*Skills Review Handbook*)

46. $19 + 32$

47. $50 + 94$

48. $181 + 217$

49. $1149 + 2021$

50. **MULTIPLE CHOICE** Which value is *not* a whole number?

(*Skills Review Handbook*)

(A) -5

(B) 0

(C) 4

(D) 113