

Comparing Integers

Name _____

Key Concept and Vocabulary

A number line shows the integers.

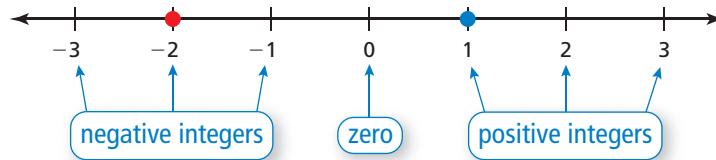


-2 is less than 1.

$$-2 < 1$$

1 is greater than -2.

$$1 > -2$$



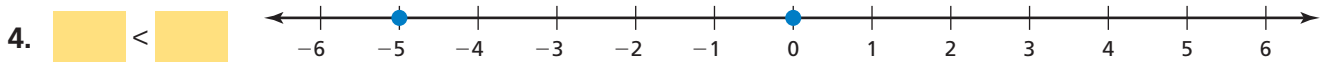
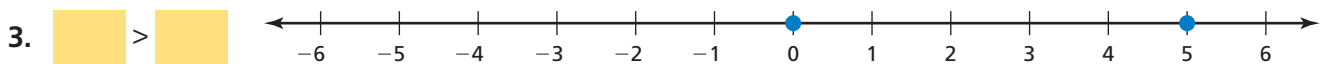
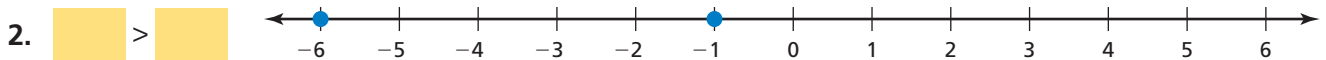
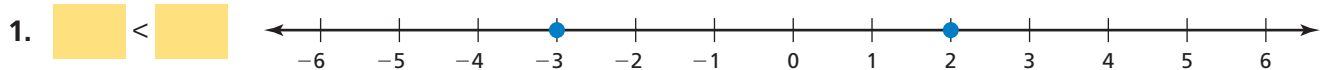
-2 is to the left of 1. So, it is less.



PRACTICE MAKES PURR-FECT™

Check your answers at BigIdeasMath.com.

Write the integers in .



5. **TEMPERATURE** What is the temperature in Fairbanks?

degrees


6. **TEMPERATURE** What is the temperature in Anchorage?

degrees

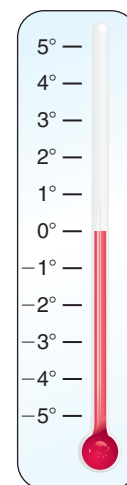
7. **TEMPERATURE** Circle the colder temperature.

Fairbanks

Anchorage



Fairbanks



Anchorage