

Comparing Integers

Name _____

Key Concept and Vocabulary

A number line shows the integers.

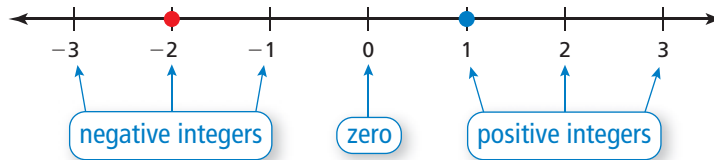


-2 is less than 1.

$$-2 < 1$$

1 is greater than -2.

$$1 > -2$$



-2 is to the left of 1. So, it is less.

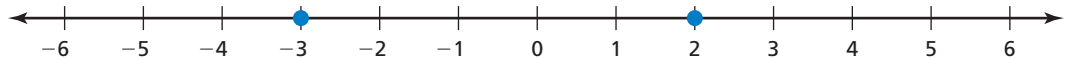


PRACTICE MAKES PURR-FECT™

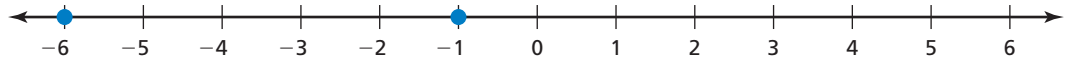
Check your answers at BigIdeasMath.com.

Write the integers in .

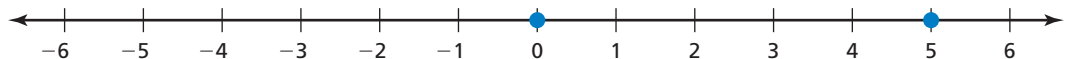
1. $-3 <$ 2



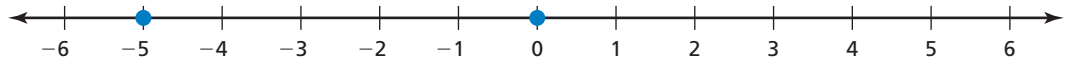
2. $-1 >$ -6



3. $5 >$ 0



4. $-5 <$ 0



5. **TEMPERATURE** What is the temperature in Fairbanks?

-4 degrees


6. **TEMPERATURE** What is the temperature in Anchorage?

0 degrees

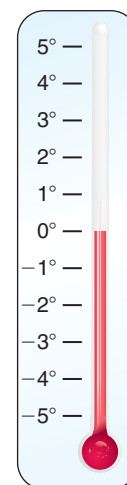
7. **TEMPERATURE** Circle the colder temperature.

Fairbanks

Anchorage



Fairbanks



Anchorage