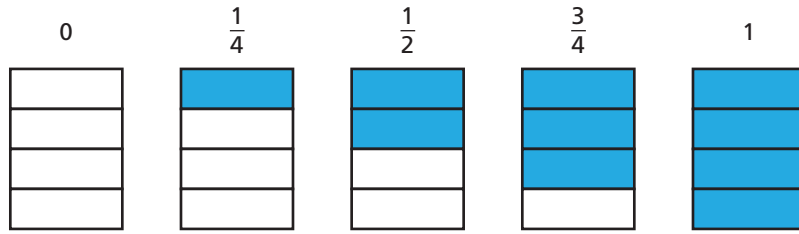


Estimating with Fractions

Name _____


Key Concept and Vocabulary




PRACTICE MAKES PURR-FECT™

Check your answers at BigIdeasMath.com.

Circle the best estimate for the shaded part.




- 0 $\frac{1}{4}$ $\frac{1}{2}$ $\frac{3}{4}$ 1




- 0 $\frac{1}{4}$ $\frac{1}{2}$ $\frac{3}{4}$ 1



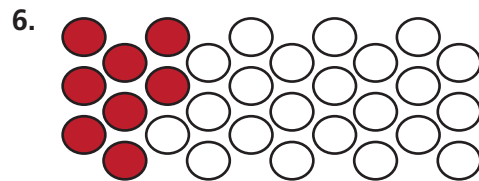
- 0 $\frac{1}{4}$ $\frac{1}{2}$ $\frac{3}{4}$ 1



- 0 $\frac{1}{4}$ $\frac{1}{2}$ $\frac{3}{4}$ 1



- 0 $\frac{1}{4}$ $\frac{1}{2}$ $\frac{3}{4}$ 1



- 0 $\frac{1}{4}$ $\frac{1}{2}$ $\frac{3}{4}$ 1

7. **GEESE IN FORMATION** Estimate the fraction of the geese that are blue.

about

