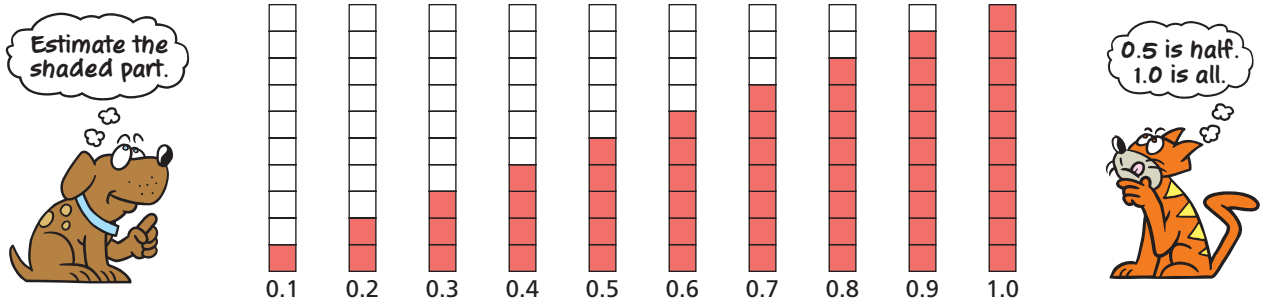


# Estimating with Decimals

Name \_\_\_\_\_

## Key Concept and Vocabulary




## PRACTICE MAKES PURR-FECT™

Check your answers at [BigIdeasMath.com](http://BigIdeasMath.com).


To the nearest tenth, estimate how much of the figure is shaded. Write  as a decimal.

1.



 Shaded Part

2.




 Shaded Part

3.



 Shaded Part

4.



 Shaded Part

5. **HIDDEN WORD PUZZLE** Shade the letters that form a hidden word. What is the word?



6. **HIDDEN WORD PUZZLE** Estimate how much of the puzzle is shaded.

 Shaded Part

