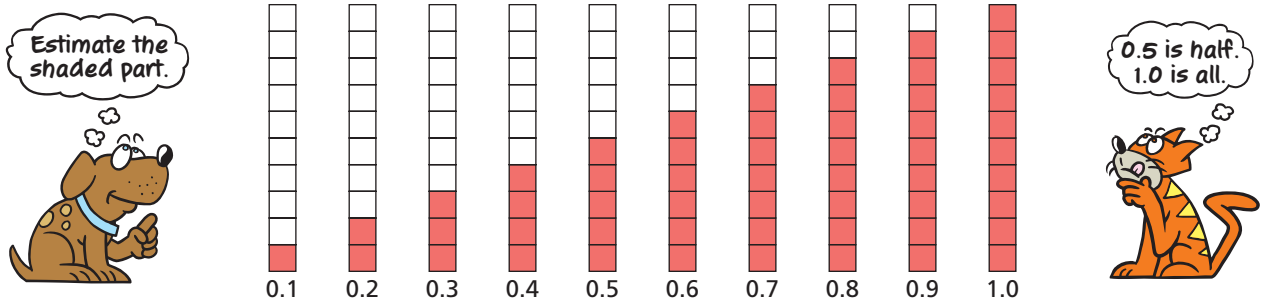


# Estimating with Decimals

Name \_\_\_\_\_




## Key Concept and Vocabulary



## PRACTICE MAKES PURR-FECT™

Check your answers at [BigIdeasMath.com](http://BigIdeasMath.com).

To the nearest tenth, estimate how much of the figure is shaded. Write  as a decimal.



5. **HIDDEN WORD PUZZLE** Shade the letters that form a hidden word. What is the word?

H O R S E

6. **HIDDEN WORD PUZZLE** Estimate how much of the puzzle is shaded.

0.5 Shaded Part

