


Subtracting Decimals


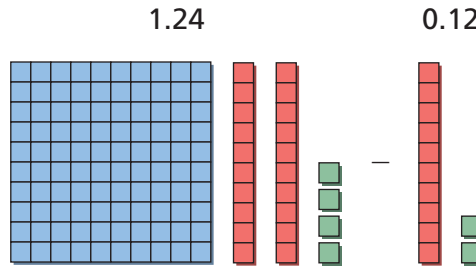
Name _____

Key Concept and Vocabulary



line up

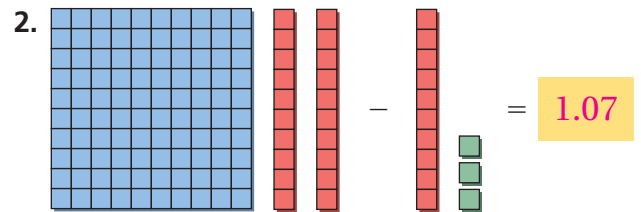
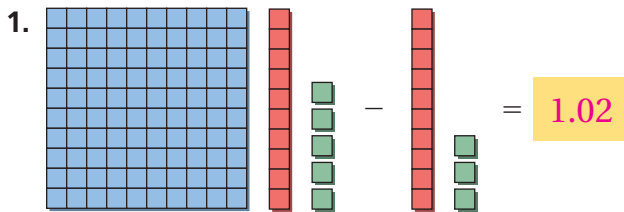
$$\begin{array}{r} 1.24 \\ - 0.12 \\ \hline 1.12 \end{array}$$



PRACTICE MAKES PURR-FECT™

Check your answers at BigIdeasMath.com.

Write the decimal subtraction in .



Subtract the decimals. Show your work in .

3. $3.45 - 2.05$

$$\begin{array}{r} 3.45 \\ - 2.05 \\ \hline 1.40 \end{array}$$

4. $5.3 - 1.6$

$$\begin{array}{r} 5.3 \\ - 1.6 \\ \hline 3.7 \end{array}$$

5. $6.52 - 5.42$

$$\begin{array}{r} 6.52 \\ - 5.42 \\ \hline 1.10 \end{array}$$

6. $11.6 - 8.6$

$$\begin{array}{r} 11.6 \\ - 8.6 \\ \hline 3.0 \end{array}$$

7. **SHOPPING** You bought a baseball cap, sunglasses, and some lip balm. How much of \$20 do you have left?

$$\begin{array}{r} \$ 5.95 \\ \$ 7.95 \\ + \$ 2.95 \\ \hline \$ 16.85 \end{array} \quad \begin{array}{r} \$ 20.00 \\ - \$ 16.85 \\ \hline \$ 3.15 \end{array}$$

