
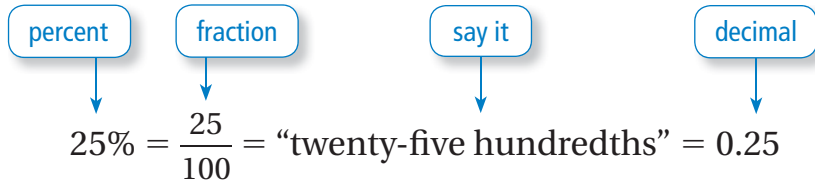


Percents and Decimals

Name _____


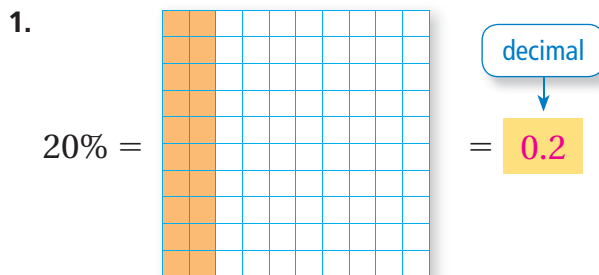
Key Concept and Vocabulary



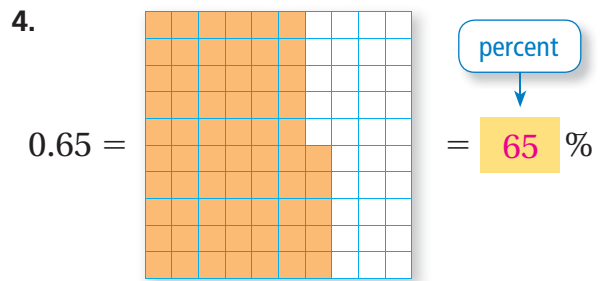

PRACTICE MAKES PURR-FECT™

Check your answers at BigIdeasMath.com.

Write the percent as a decimal.



Write the decimal as a percent.



5. **737** An empty 737 jet weighs about 60,000 pounds. About 35% of this weight is in the wings. Write this percent as a decimal.

$$35\% = \mathbf{0.35}$$

6. **737** Estimate how much the wings weigh.

$$\mathbf{21,000} \text{ lb}$$

