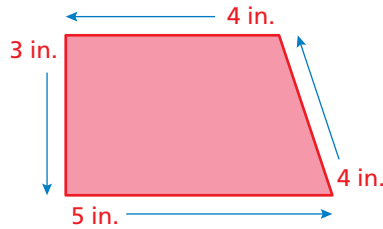



Perimeter

Name _____

Key Concept and Vocabulary



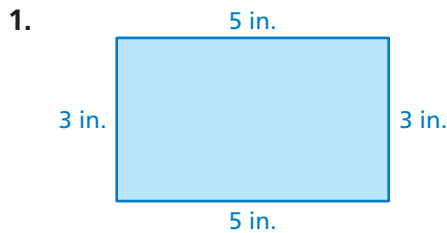
$$\begin{aligned} \text{Perimeter} &= 3 + 5 + 4 + 4 \\ &= 16 \text{ in.} \end{aligned}$$



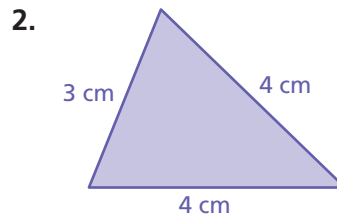
PRACTICE MAKES PURR-FECT™

Check your answers at BigIdeasMath.com.

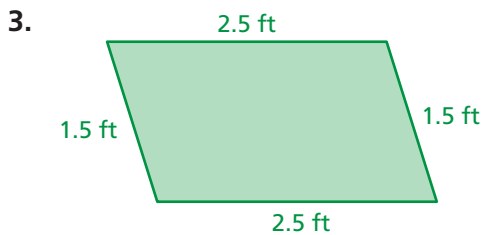
Write the perimeter of the figure in . Include the units in your answer.



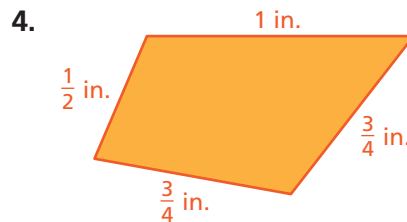
Perimeter =



Perimeter =



Perimeter =



Perimeter =

5. **PASTURE FENCE** Find the perimeter of the pasture.

Perimeter =

6. **PASTURE FENCE** You have 450 feet of fencing. Do you have enough to fence the pasture?

Yes

No

