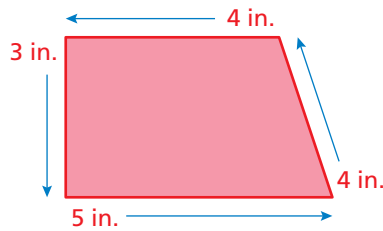



# Perimeter

Name \_\_\_\_\_

## Key Concept and Vocabulary



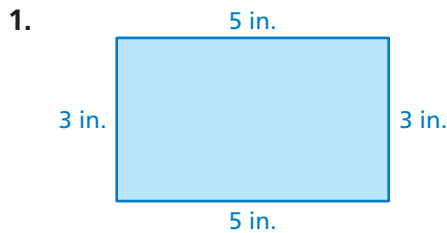
$$\begin{aligned} \text{Perimeter} &= 3 + 5 + 4 + 4 \\ &= 16 \text{ in.} \end{aligned}$$



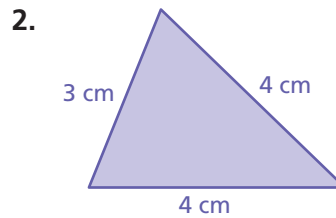
## PRACTICE MAKES PURR-FECT™

Check your answers at [BigIdeasMath.com](http://BigIdeasMath.com).

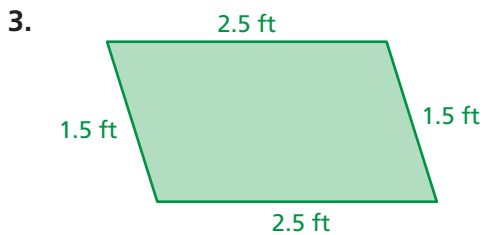
Write the perimeter of the figure in     . Include the units in your answer.



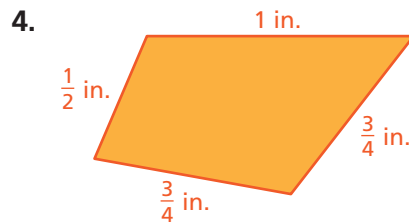
Perimeter = 16 in.



Perimeter = 11 cm



Perimeter = 8 ft



Perimeter = 3 in.

5. **PASTURE FENCE** Find the perimeter of the pasture.

Perimeter = 455 ft

6. **PASTURE FENCE** You have 450 feet of fencing. Do you have enough to fence the pasture?

Yes

No

