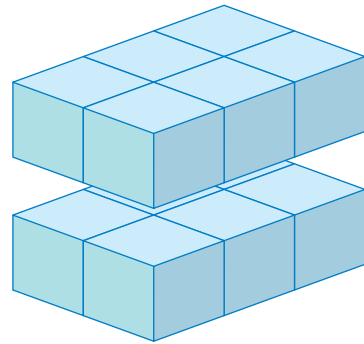
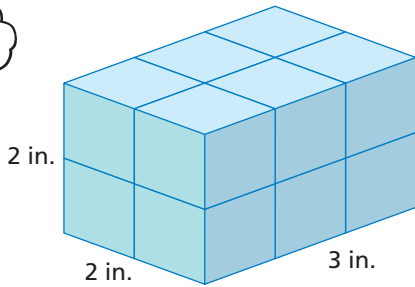


Volume by Counting

Name _____

Key Concept and Vocabulary

Each small cube is 1 cubic inch.



Volume is measured in cubic units.

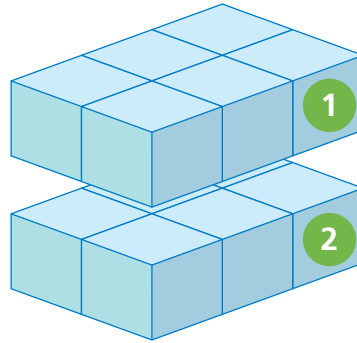
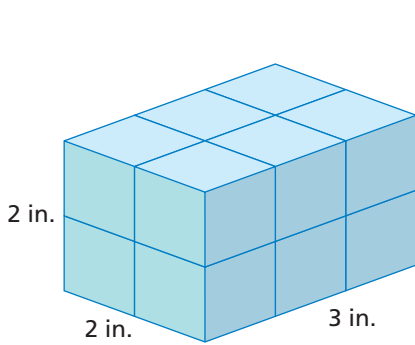


PRACTICE MAKES PURR-FECT™

Check your answers at BigIdeasMath.com.

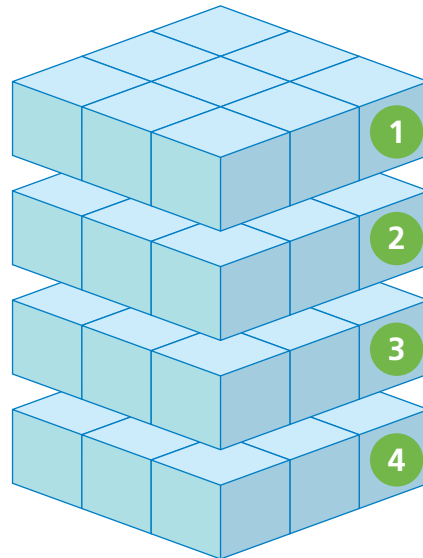
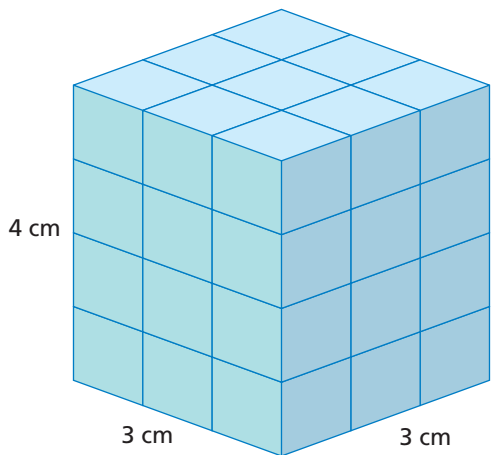
Find the volume of the prism. Include the units in your answer.

1.



| | | |
|---|--------|---|
| + | | 1 |
| + | | 2 |
| = | | |
| | ↑ | |
| | volume | |

2.



| | | |
|---|--------|---|
| + | | 1 |
| + | | 2 |
| + | | 3 |
| + | | 4 |
| = | | |
| | ↑ | |
| | volume | |