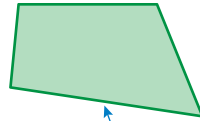


# Similar Figures

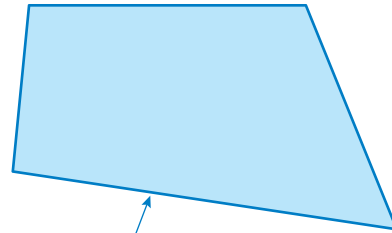
Name \_\_\_\_\_

## Key Concept and Vocabulary

Similar figures have the same shape.



half size



full size

But, not necessarily the same size.



## PRACTICE MAKES PURR-FECT™

Check your answers at [BigIdeasMath.com](http://BigIdeasMath.com).

Circle the two figures that are similar.

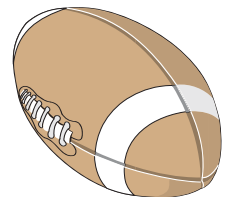
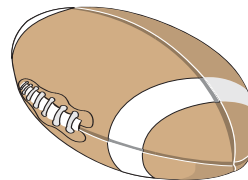
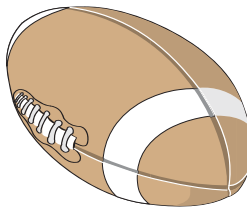
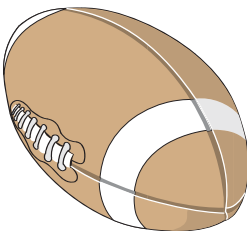
1.



2.



3.



4.

