

Double Bar Graphs

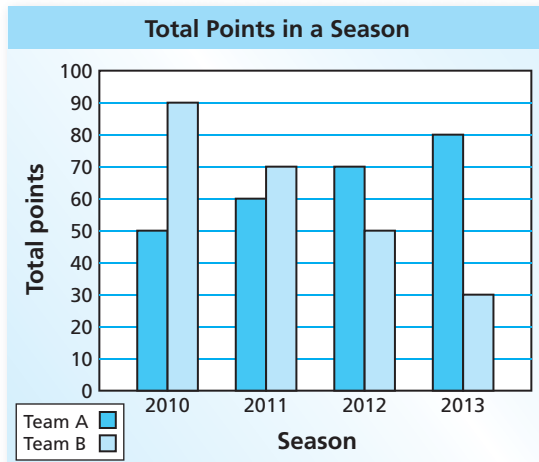
Name _____

Key Concept and Vocabulary

Two data sets are compared.



Total Points in a Season		
	Team A	Team B
2010	50	90
2011	60	70
2012	70	50
2013	80	30



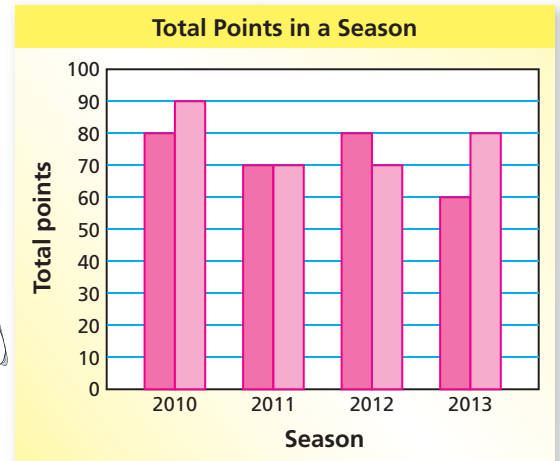
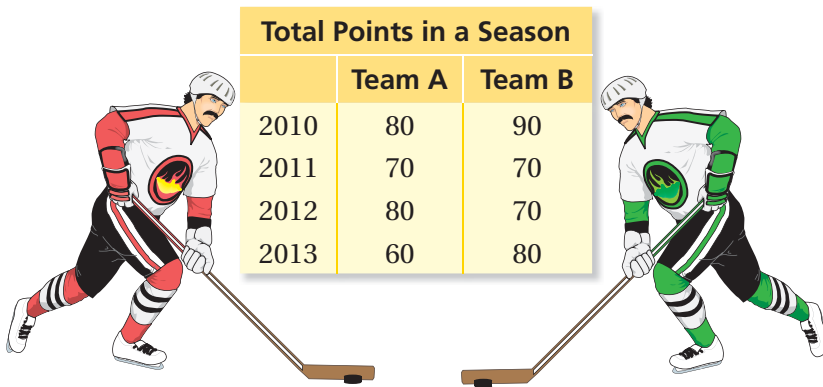
The color of the bar shows what is measured.



PRACTICE MAKES PURR-FECT™

Check your answers at BigIdeasMath.com.

1. **COMPARING HOCKEY TEAMS** Make a double bar graph that compares the two teams.



2. **POLAR BEARS AND SEALS** Estimate the population of each animal in 2011.

