



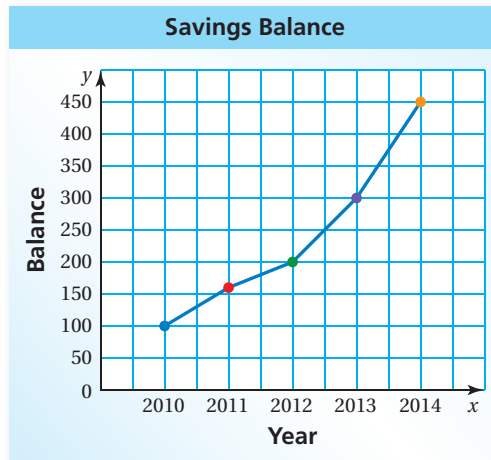
Line Graphs

Name _____

Key Concept and Vocabulary



Savings Balance	
● 2010	\$100
● 2011	\$160
● 2012	\$200
● 2013	\$300
● 2014	\$450



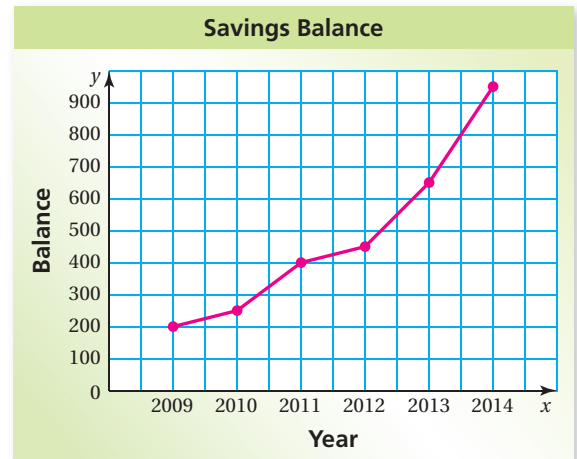
PRACTICE MAKES PURR-FECT™

Check your answers at BigIdeasMath.com.

1. **SAVINGS ACCOUNT** Make a line graph that shows the balance in the savings account.



Savings Balance	
2009	\$200
2010	\$250
2011	\$400
2012	\$450
2013	\$650
2014	\$950



2. **POPULATION OF CANADA** Find the population of Canada in 1960 and in 2000.

Sample answer:

18,000,000

1960 Population

31,000,000

2000 Population

