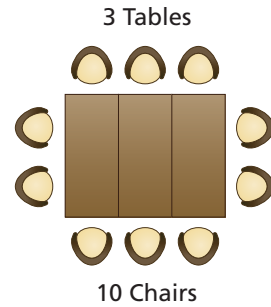
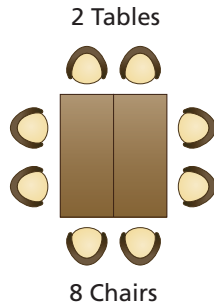
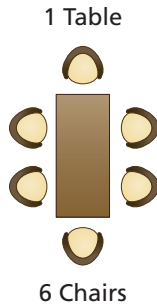


Drawing a Graph

Name _____

Key Concept and Vocabulary

The first table holds 6 chairs.



Adding another table adds only 2 more chairs.



PRACTICE MAKES PURR-FECT™

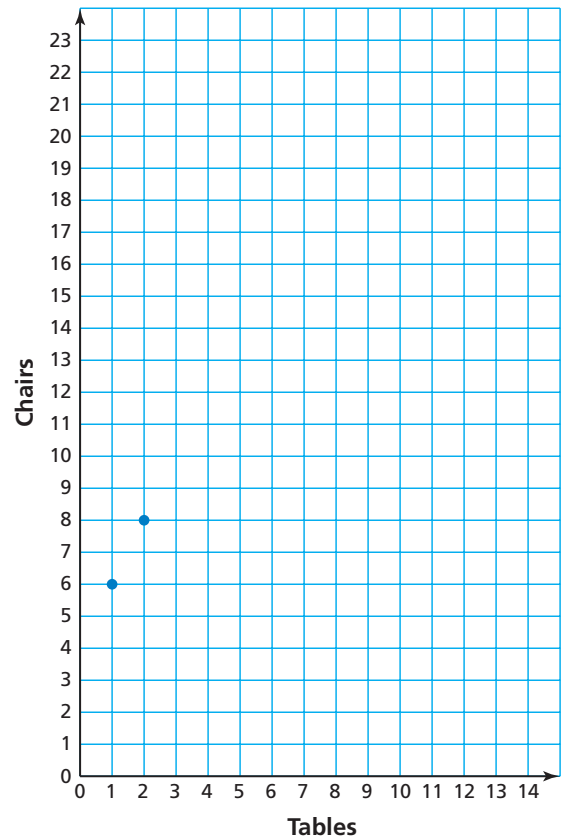
Check your answers at BigIdeasMath.com.

1. **EXTENDING A PATTERN** Complete the table.

Tables	1	2	3	4	5	6	7
Chairs	6	8	10				

2. **GRAPHING A PATTERN** Complete the graph.

3. **DESCRIBING A PATTERN** Describe the pattern of the graph.



4. **EXTENDING A PATTERN** If you set up 10 tables, how many chairs would there be?

chairs