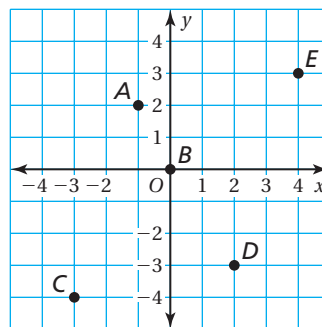
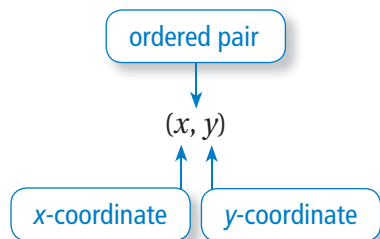


Key Concept and Vocabulary



Skill Examples

1. $A(-1, 2)$ (Quadrant II)
2. $B(0, 0)$ (origin)
3. $C(-3, -4)$ (Quadrant III)
4. $D(2, -3)$ (Quadrant IV)
5. $E(4, 3)$ (Quadrant I)

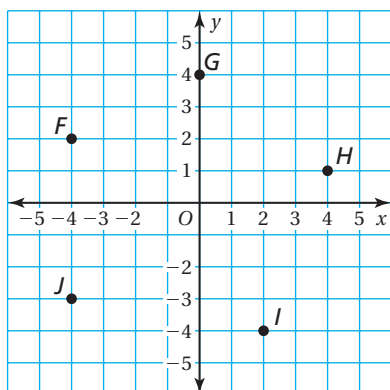
PRACTICE MAKES PURR-FECT™



Check your answers at BigIdeasMath.com.

Write the ordered pair that represents the point in the coordinate plane.

6. F $(-4, 2)$
7. G $(0, 4)$
8. H $(4, 1)$
9. I $(2, -4)$
10. J $(-4, -3)$



Plot the ordered pair in the coordinate plane. Name the quadrant for the point.

11. $K(-3, 5)$ Quadrant II
12. $L(-3, 0)$ x-axis
13. $M(2, 5)$ Quadrant I
14. $N(4, -2)$ Quadrant IV
15. $P(-2, -4)$ Quadrant III

